

विद्यालय का नाम:—.....

तृतीय योगात्मक आंकलन-2022-23

विषय-गणित

कक्षा-1

दिनांक:—.....

नाम.....

रोल नं०.....

प्राप्त ग्रेड:—.....

1. गिनती पूरी करो:—

(अ)

15					20				
----	--	--	--	--	----	--	--	--	--

(ब)

		31					36		
--	--	----	--	--	--	--	----	--	--

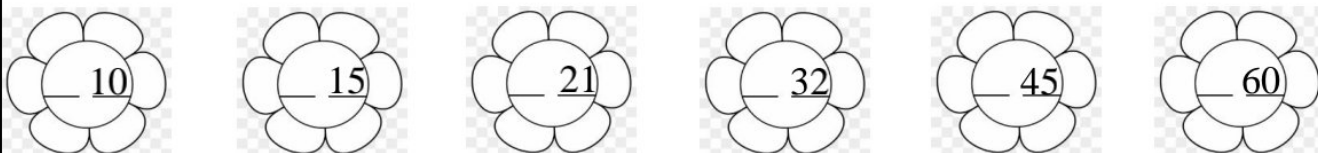
(स)

	46				50				
--	----	--	--	--	----	--	--	--	--

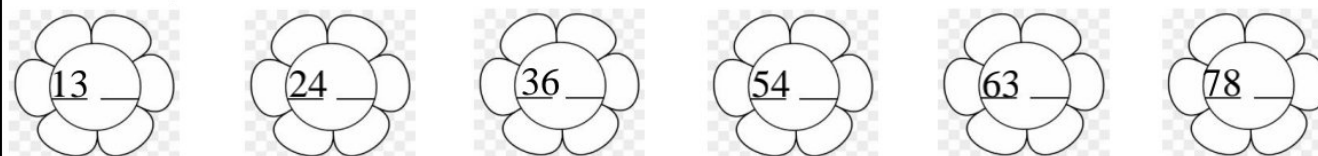
(द)

82								89	
----	--	--	--	--	--	--	--	----	--

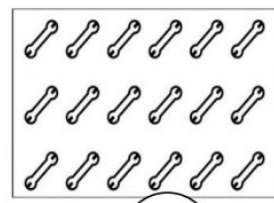
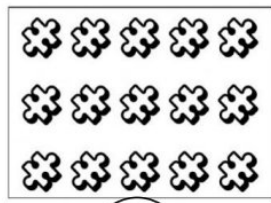

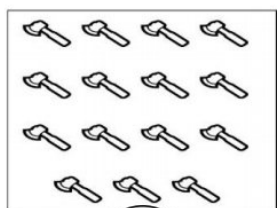
2. ठीक पहले आने वाली संख्या लिखो:—



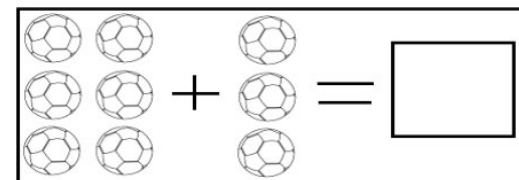
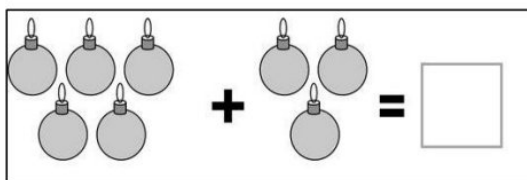
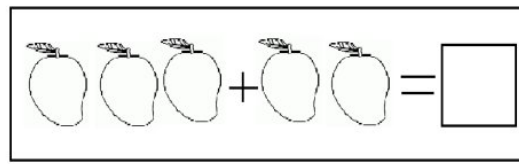
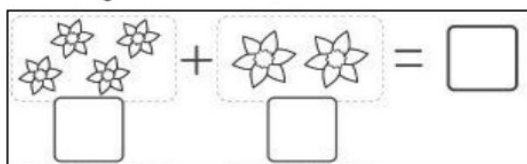
3. ठीक बाद में आने वाली संख्या लिखो:—



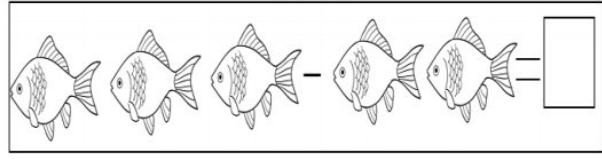

4. आकृतियों को गिनकर लिखो:—



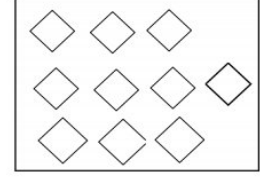
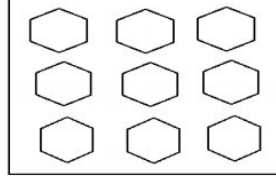

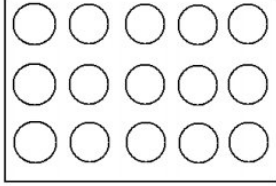
5. आकृतियों को जोड़कर लिखो:—



6. आकृतियों को घटाकर लिखिए:-



7. मिलान कीजिए:-



6

15

10

9

8. जोड़ कीजिए-

$$\begin{array}{r} 52 \\ +13 \\ \hline \end{array}$$

$$\begin{array}{r} 64 \\ +30 \\ \hline \end{array}$$

$$\begin{array}{r} 72 \\ +51 \\ \hline \end{array}$$

$$\begin{array}{r} 86 \\ +13 \\ \hline \end{array}$$

$$\begin{array}{r} 55 \\ +23 \\ \hline \end{array}$$

$$\begin{array}{r} 67 \\ +40 \\ \hline \end{array}$$

9. घटाव कीजिए:-

$$\begin{array}{r} 73 \\ -13 \\ \hline \end{array}$$

$$\begin{array}{r} 89 \\ -43 \\ \hline \end{array}$$

$$\begin{array}{r} 64 \\ -33 \\ \hline \end{array}$$

$$\begin{array}{r} 69 \\ -25 \\ \hline \end{array}$$

$$\begin{array}{r} 85 \\ -42 \\ \hline \end{array}$$

$$\begin{array}{r} 96 \\ -53 \\ \hline \end{array}$$

10. बड़ी संख्या पर (✓) लगाइये:-

10 7

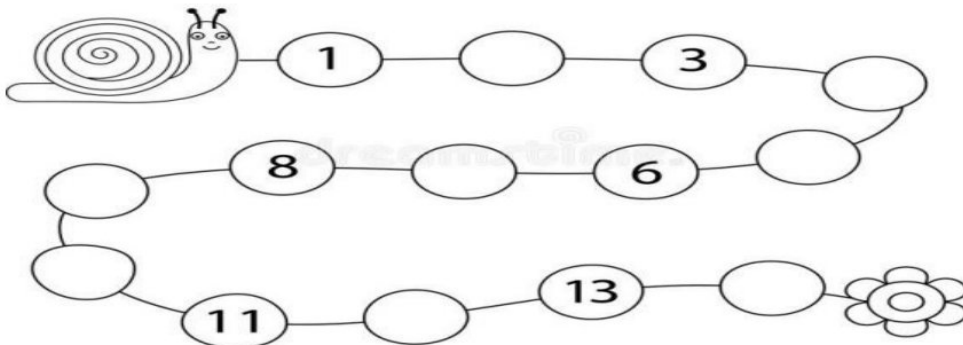
6 9

8 9

5 3

12 21

11. छोटे हुए नम्बर लिखो:-



अध्यापक टिप्पणी:-.....